

# Holidays

## Homework


### Class III



# Happy Holidays

Your Summer vacation is a wonderful time to relax, recharge, and explore new interests. While you enjoy your well-deserved break, here are some meaningful ways to make the most of your holidays:

 Learn Something New.

 Take Care of Your Health

- Exercise regularly

- Eat healthy

- Sleep well

 Help your parents and elders at home.

 Avoid wasting water and electricity.

★ Remember, vacation is not just about doing less—it's about doing differently. Use this time to grow, discover yourself, and come back refreshed and ready!

Have a safe, joyful, and meaningful summer vacation!  

text

## Important Note

- ✚ Summer Vacation commences w.e.f 26.05.2025 (Monday) and school will reopen on 07.07.2025 (Monday).
- ✚ Homework should be done neatly and in a proper way.
- ✚ The best holidays homework submitted on the first day after summer vacation will be rewarded.
- ✚ Kindly pay the fee (July-September 2025) by 10.07.2025.



# English

**Note: Do this work in English notebook.**

1. Solve PT-1 Question paper.

2. (State tree of Andhra Pradesh is Neem and of Punjab is Sheesham).

Title of the topic is 'Neem heals and Sheesham builds'

Write 8-10 lines on the practical uses of state trees of Punjab and Andhra Pradesh.

3. Read the story 'The Ass Has No Brains' (Extended Reading) and pick out any 10 nouns and frame sentences of those nouns.

4. You can take printouts of given assignments and comprehension passage, solve and paste in your notebook.

## English worksheet Class 3

### I. Rearrange the group of words given below to form sentence:

- 1) in fruits the lying basket are the \_\_\_\_\_.
- 2) cricket vicky play to likes \_\_\_\_\_.

### II. Choose the correct predicate for the sentences given below:

- 1) I boiled an egg for breakfast.  
(a) an egg for breakfast. (b) boiled an egg for breakfast.  
(c) egg for breakfast. (d) for breakfast.
- 2) Ankita and her friend went to watch a movie.  
(a) to watch a movie. (b) went to watch a movie.  
(c) her friend went to watch a movie (d) watch a movie.

### III. Identify the subject for the given sentence:

- 1) The child ate some porridge. \_\_\_\_\_.
- 2) The feathers of the birds are colourful. \_\_\_\_\_.

### IV. Identify and write the kind of noun in the sentences given below:

- 1) Nisha sat on the mat. **Ans** \_\_\_\_\_.
- 2) The Ganga is a sacred river. **Ans** \_\_\_\_\_.
- 3) I purchased a bunch of grapes . **Ans** \_\_\_\_\_.

### V. Fill in the blanks with the suitable helping verb:

- 1) I \_\_\_\_\_ making coffee for my mother.
- 2) She \_\_\_\_\_ a good dancer.
- 3) Jagan and Meera \_\_\_\_\_ my cousins.

### VI. Identify the tense in the sentence given below:

- 1) I saw him at the cinema last evening. \_\_\_\_\_.
- 2) They will go to America next week \_\_\_\_\_.
- 3) Mahima clean her room every month. \_\_\_\_\_.
- 4) Shiv and Pia play tennis every evening. \_\_\_\_\_.

### VII. Rewrite the sentences using apostrophe :

- 1) teachers diaries \_\_\_\_\_.
- 2) uncles car \_\_\_\_\_.
- 3) my relatives house \_\_\_\_\_.

### VIII. Fill in the blanks with plural form of the nouns:

- 1) There is no \_\_\_\_\_ to sit on .(chair/chairs)
- 2) The postman delivers \_\_\_\_\_.(letter/ letters)

### IX. Fill in the blanks with the correct option:

- 1) A sentence is a group of words that makes \_\_\_\_\_( complete / partial ) sense.
- 2) The \_\_\_\_\_ of a sentence contains the verb.(subject/predicate)
- 3) A \_\_\_\_\_ noun is the name of a collection of people, animals or things.  
( proper / collective)

Andhra Pradesh and Punjab are two states in India. They have different climates and plants. Andhra Pradesh is a tropical state with warm weather. It has many mango trees, coconut trees, and sandalwood trees. These trees grow well in the state's warm climate. Mango trees give us delicious fruits, while coconut trees provide us with coconuts and leaves that can be used for various purposes. Punjab, on the other hand, is known for its fertile land and green fields, making it suitable for growing crops like wheat and rice. The state's climate and soil support the growth of these crops, earning it the title of "breadbasket of India."

**Q1. Answer the following questions :**

1. What type of trees are commonly found in Andhra Pradesh?
2. What crops are commonly grown in Punjab?

**Q2. True or False:**

1. Punjab is known for its mango trees. \_\_\_\_\_
2. Andhra Pradesh is known for its wheat crops. \_\_\_\_\_

**Q3. Fill in the blanks:**

1. Andhra Pradesh has a \_\_\_\_\_ climate.
2. Punjab is known for growing \_\_\_\_\_ and \_\_\_\_\_.

**Q4. Choose the correct option:**

1. What is Punjab known as?  
A) The "land of coconuts"  
B) The "breadbasket of India"  
C) The "land of mangoes"  
D) The "land of spices"
2. What do coconut trees provide us with?  
A) Only coconuts.  
B) Only leaves  
C) Coconuts and leaves.  
D) Coconuts and Mangoes

# EVS

**Note: Do the entire work in EVS NOTEBOOK**

1. Solve PT-1 Question paper.
2. Name any five native plants of Andhra Pradesh and Punjab and write briefly about their medicinal value and the disease for which they are used to cure.
3. Do Activity 2 mentioned on Page 55 of EVS Textbook.
4. Draw-or paste pictures of different types of vehicles and write their uses.
5. Write 10 lines on Kumbh mela, search 3-4 related pictures from newspaper and paste in notebook.

# Maths

**NOTE: Do the entire work in maths notebook.**

1. LEARN TABLES 2 TO 17.
2. Solve PT-1 Question paper.
3. The following table shows the average price of food crops of Punjab and Andhra Pradesh (per quintal). On the basis of table answer the following questions:

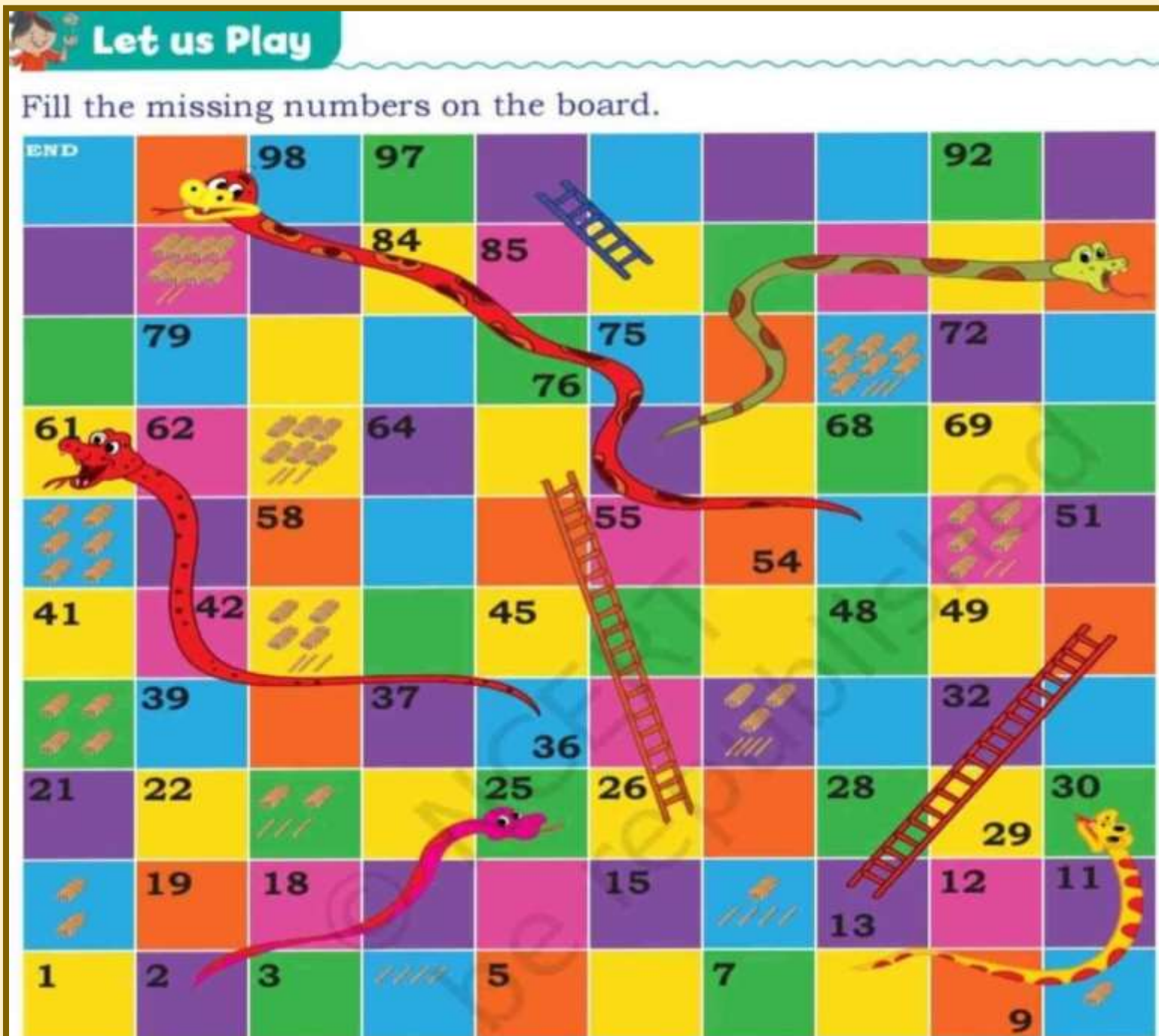
Food Crops	Price in Punjab (per quintal)	Price in Andhra Pradesh (per quintal)
Rice	₹ 2200	₹ 2150
Maize	₹ 2300	₹ 2250
Groundnut	₹ 5100	₹ 5050
Sugarcane	₹ 355	₹ 335
Wheat	₹ 2100	₹ 2050

## (Solve in notebook)

1. Write the price of wheat of Andhra Pradesh in words.
2. Name the food crops of Punjab whose price is an odd number.
3. Arrange the price of food crops of Andhra Pradesh in descending order.
4. Which food crop has the maximum price from both the states?
5. Write the predecessor of price of maize in Punjab.
6. Draw or paste pictures of any two crops.



4. Take printouts of the given assignments, solve and paste in Maths notebook.

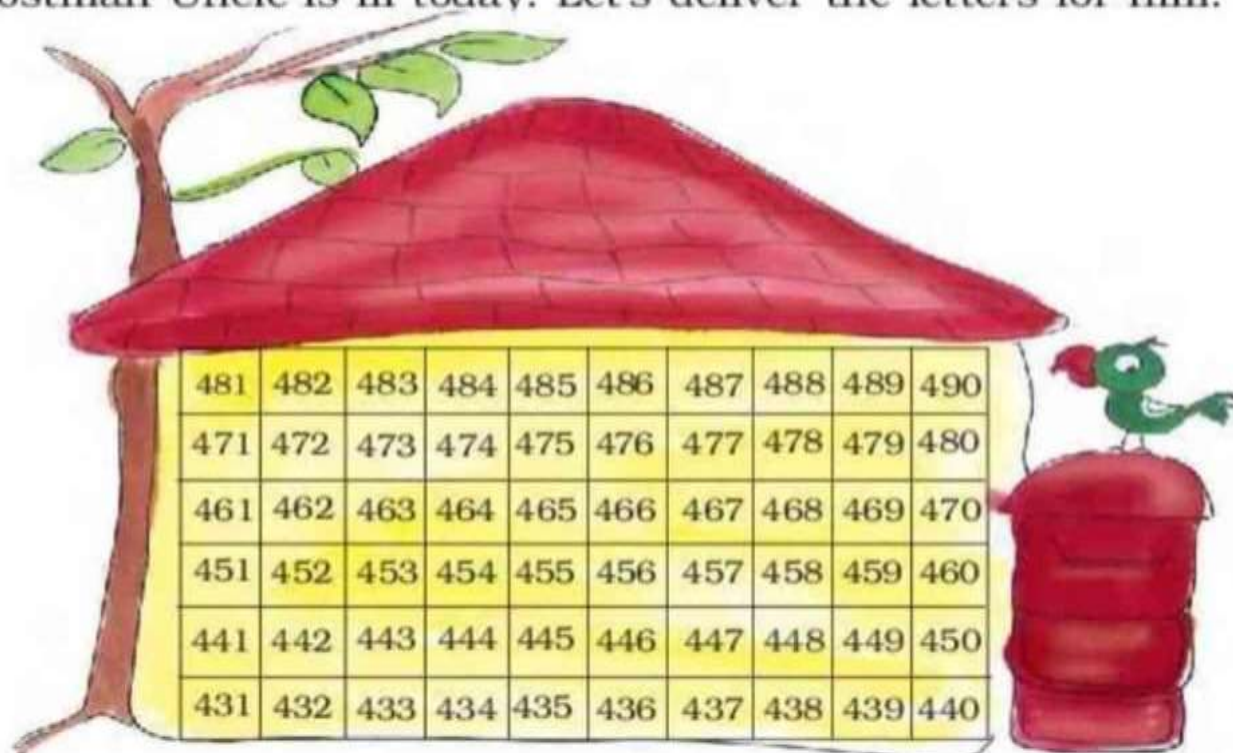


Answer the following on the basis of the Snakes and Ladders board:

- Which number will you reach if you take the ladder from 13?  
.....
- If you are on the snake at number 25, which number will you reach? .....
- You are standing on 96. Which number on the die will take you to the snake's mouth? .....

## Let's Deliver Letters

Postman Uncle is ill today. Let's deliver the letters for him.



Write the correct room numbers on the letters. Then find the rooms in the above building and circle them.

Make a circle on room 455.

$445 + 10$  Room 455

$467 + 11$  Room

$450 - 19$  Room

$430 + 15$  Room

$456 - 20$  Room 436

$480 - 9$  Room

$498 - 23$  Room

$467 + 22$  Room

$430 + 20 + 13$  Room

$452 + 18$  Room

$461 + 25$  Room

$426 + 38$  Room

$429 + 10 + 20$  Room

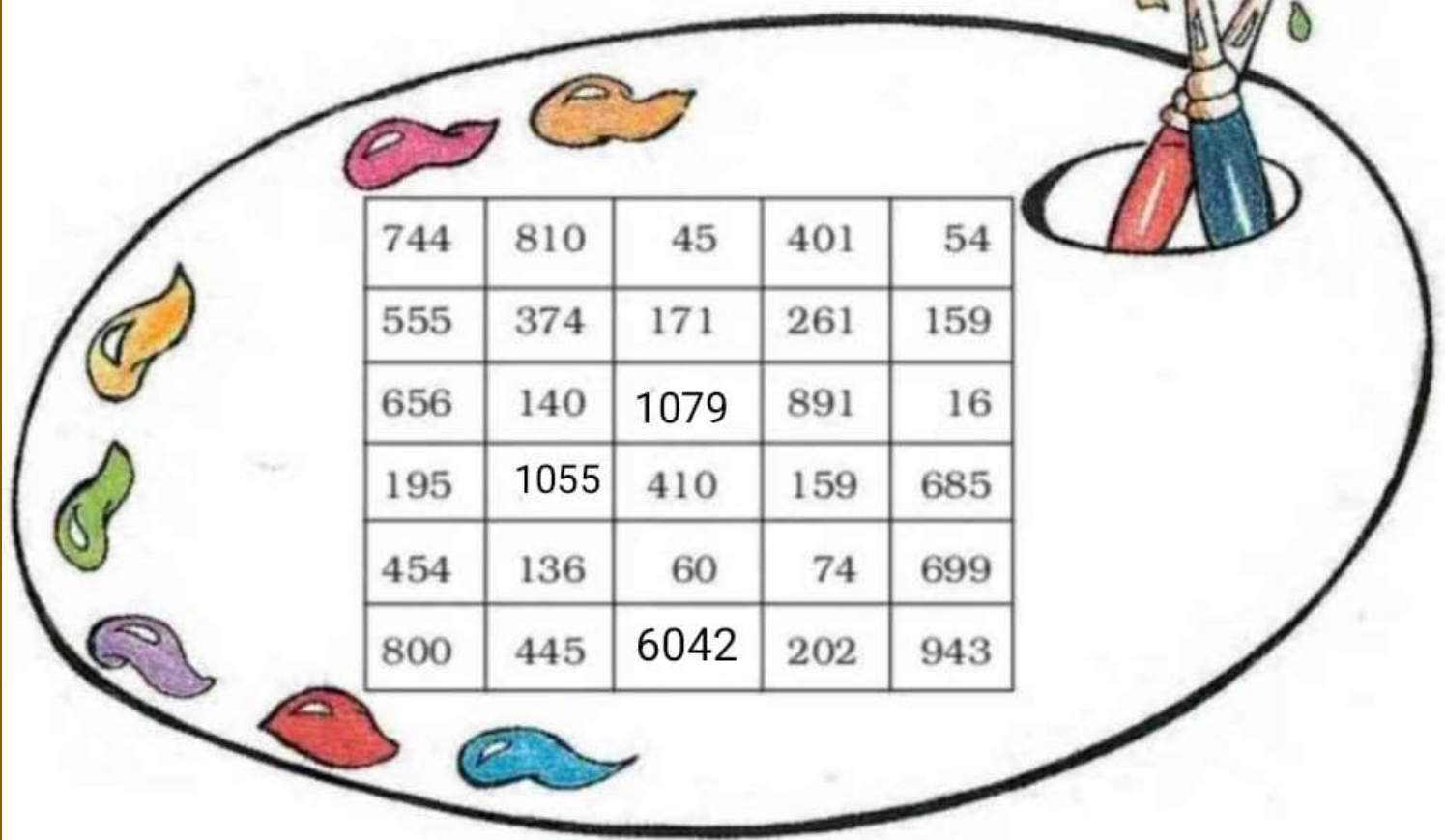
$466 - 33$  Room

$410 + 13 + 11$  Room




The teacher should encourage students to solve the problems mentally using the above chart.



## Colour the Numbers



**Find these numbers in the above chart. Colour them.**

 Green	 Red	 Yellow
One hundred forty	Fifty-four	Four hundred forty-five
Two hundred two	Sixty	Sixteen
Two hundred sixty-one	One hundred ninety-five	One hundred fifty-nine
Eight hundred	Five hundred fifty-five	Six hundred eighty-five
$300 + 70 + 4$	$6000 + 40 + 2$	$600 + 90 + 9$
$600 + 50 + 6$	$1000 + 70 + 9$	$70 + 4$
$5 + 50 + 1000$	$800 + 10$	$1 + 90 + 80$



Tick (✓) the correct choice.

1. Which number is represented by the Abacus?

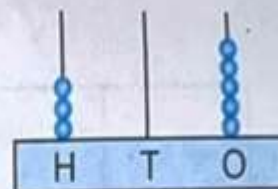
(a) 315

☐

(b) 305

☐

(c) 350

☐

2. One thousand one hundred eleven is written as

(a) 101

☐

(b) 1001

☐

(c) 1111

☐

3. In 7890, the place value of 7 is

(a) 7000

☐

(b) 700

☐

(c) 70

☐

4. In 7991, the face value of 1 is

(a) 1

☐

(b) 10

☐

(c) 1000

☐

5. In 6789, which digit has the least face value?

(a) 7

☐

(b) 6

☐

(c) 9

☐

6. The number that comes just before a given number is called its

(a) successor

☐

(b) predecessor

☐

(c) remainder

☐

7. The number that comes just after a given number is called its

(a) successor

☐

(b) predecessor

☐

(c) quotient

☐

8. Write the smallest 3-digit number using all the digits only once: 4, 5, 2.

(a) 254

☐

(b) 245

☐

(c) 425

☐

9. Write the greatest 4-digit number using all the digits only once: 2, 3, 4, 5.

(a) 4532

☐

(b) 4325

☐

(c) 5432

☐

10. 6020 comes just after

(a) 6021

☐

(b) 6019

☐

(c) 6119

☐

# Punjabi

**Note: Do this work in Punjabi notebook.**

1. Solve PT-1 Question paper.
2. ਪੰਜਾਬ ਤੇ ਆਂਧਰਾ ਪ੍ਰਦੇਸ਼ ਦੇ ਗਰਮੀਆਂ ਦੇ ਮੌਸਮ ਵਿੱਚ ਹੋਣ ਵਾਲੇ ਪੌਦਿਆਂ ਦੇ ਨਾਂ ਲਿਖੋ ਅਤੇ ਕਿਸੇ ਇੱਕ ਬਾਰੇ 5 ਲਾਈਨਾਂ ਲਿਖੋ।
3. ਸਵੇਰ ਦੀ ਸੈਰ ਨਾਲ ਹੋਣ ਵਾਲੇ ਲਾਭ 5-6 ਲਾਈਨਾਂ ਵਿੱਚ ਲਿਖੋ।
4. ਕੋਈ 5 ਦੇਸ਼ ਭਗਤਾਂ ਦੀਆਂ ਤਸਵੀਰਾਂ ਨੇਟਬੁੱਕ ਵਿੱਚ ਚਿਪਕਾਓ ਅਤੇ ਉਹਨਾਂ ਦੇ ਜਨਮ, ਮਾਤਾ- ਪਿਤਾ ਅਤੇ ਸੁਤੰਤਰਤਾ ਵਿੱਚ ਯੋਗਦਾਨ ਬਾਰੇ ਸੰਖੇਪ ਵਿੱਚ ਲਿਖੋ।
5. ਮੌਖਿਕ ਕਵਿਤਾ 'ਸੱਜਰੀ ਸਵੇਰ' ਯਾਦ ਕਰੋ।

# Hindi

**Note:- Do this work in Hindi notebook.**

1. Solve PT-1 Question paper.
2. Write Varanmala अ-ण . (2 times)
3. You can take printouts of given assignments, solve and paste.



<

अः

अं •

औ •

अ

ऐ •

• ओ

• आ

ए •

• इ

ॠ •

ॡ •

ॢ •

ॣ •

। •

अक्षर को चित्र से मिलाओ

ए

.

.



ऐ

.

.



ओ

.

.



औ

.

.



अं

.

.



अः

.

.





चित्र पहचानें और स्वर से मिलायें ।



आ



ओ



५



अं



७



५



来



अ

457

औ

hwy

५

1



चित्र देखकर पहला अक्षर लिखे और रंग भरो

ओखली




\_\_\_\_\_



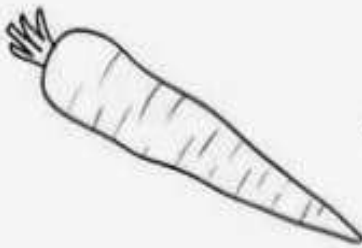
\_\_\_\_\_



\_\_\_\_\_



\_\_\_\_\_



\_\_\_\_\_



\_\_\_\_\_



\_\_\_\_\_

1

\_\_\_\_\_



\_\_\_\_\_



\_\_\_\_\_



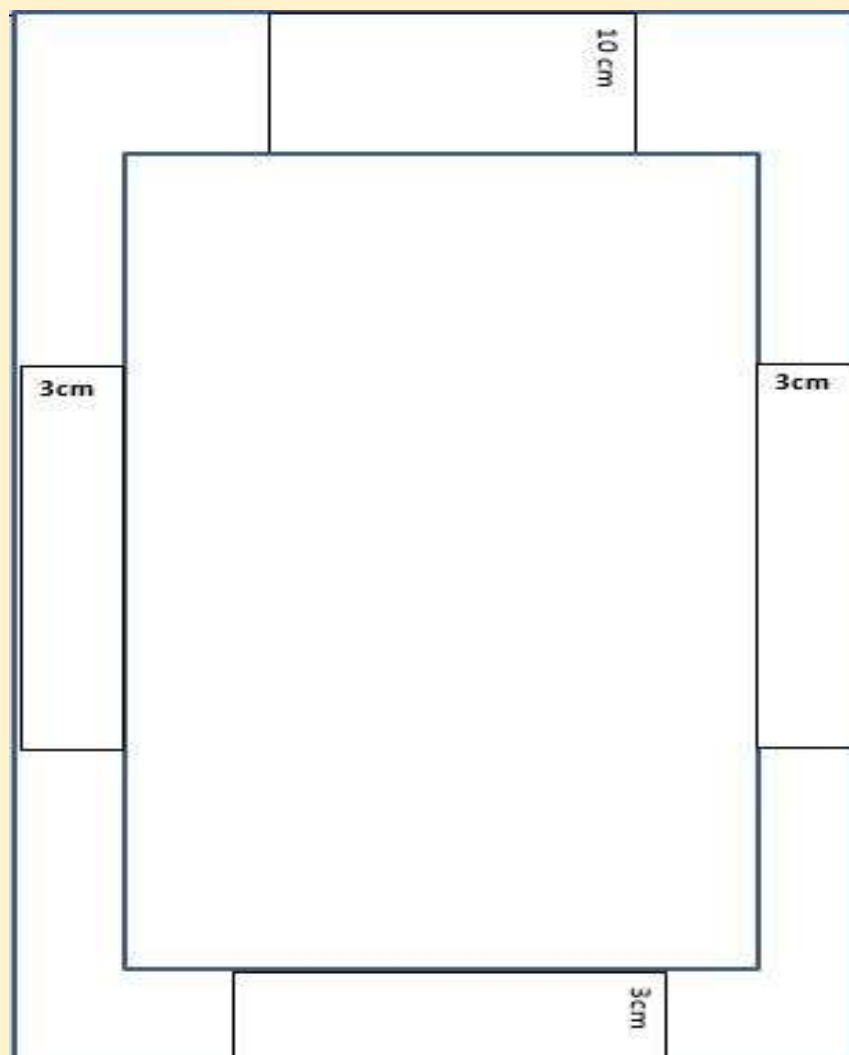
## Topics for Charts (for sections-Red, Green, Pink, Yellow)

Roll No.	Subject	Topic
1-2	Comp.	AI gadgets and machines
3-4	EVS	Parts of Plant
5-6	EVS	Reduce, Reuse, Recycle
7-8	Maths	Fractions(whole, $1/2$ , $1/3$ , $1/4$ ) book pg.77
9-10	Maths	Solid shapes (with faces, edges ,vertices) book g.94
11-12	English	Nouns
13-14	English	Poem: Colours
15-16	English	Adjectives
17-18	G.K.	Festivals of India
19-20	Punjabi	ਕਵਿਤਾ- ਸੱਜਰੀ ਸਵੇਰ
21-22	Punjabi	ਕਵਿਤਾ -ਪਾਣੀ
23-24	Hindi	Story बंदर और मगरमच्छ (with the help of pictures)
25-26	Hindi	Story कछुआ और खरगोश (with the help of pictures)
27-28	G.K.	Sports Personalities
29-30	Hindi	Varanmala
31-32	Dance	Classical dances of India
33-34	Music	Musical instruments
35-36	Maths	Table of 16,17

## **Instructions:-Prepare Chart according to your Roll number**

1. Use a thick full white chart.
2. Use chart vertically.
3. Write headings with pencils.
4. Don't colour the borders.
5. Use thick black marker for written material.
6. Size of the letters should be 3cm.
7. Topics of chart are given according to the Roll numbers.

## **Format for charts**



## **Topics for Charts (for section-Blue)**

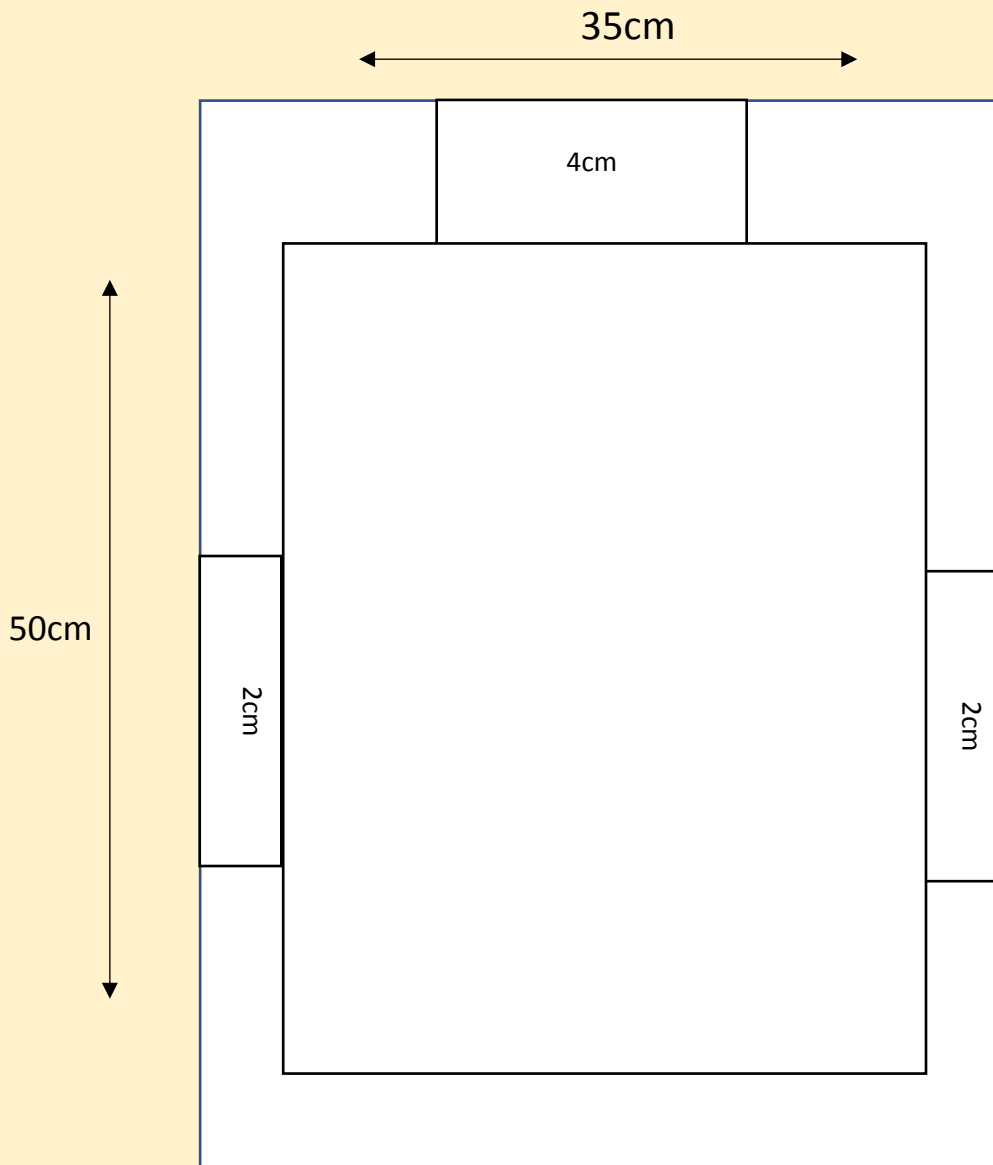
<b>Roll No.</b>	<b>Subject</b>	<b>Topic</b>
1	G.K.	Sports personalities
2	EVS	Uses of plants
3	EVS	Parts of Plant
4	English	Nouns
5	EVS	Types of houses
6	English	Preposition
7	Hindi	Story बंदर और मगरमच्छ (with the help of pictures)
8	G.K.	Solar system
9	English	Tenses
10	Hindi	Story कछुआ और खरगोश (with the help of pictures)
11	Hindi	Matras आ-अं तक
12	G.K.	<b>Endangered animals</b>
13	Hindi	<b>Varanmala</b>
14	Punjabi	ਕਵਿਤਾ- ਸੱਜਰੀ ਸਵੇਰ
15	G.K.	Festivals of India
16	English	Poem:colours
17	Punjabi	ਗਿਣਤੀ 1 - 20
18	English	Adjectives
19	Punjabi	ਕਵਿਤਾ -ਪਾਣੀ
20	Maths	Table of 16,17
21	Maths	Fractions(whole, 1/2,1/3,1/4) book pg 77
22	Maths	Solid shapes (with faces, edges ,vertices) book g.94
23	Maths	Time ( explaining minutes to and min past) pg. 127



## **Instructions:-Prepare Chart according to your Roll number**

1. Size 50 cm x 35 cm.
2. Draw border of 2 cm on 4 sides.
3. Leave space for heading of 4 cm.
4. Use thick white chart paper.
5. Don't fill any colour in borders.
6. Use black marker for writing.
7. Draw chart vertically.
8. Write heading with pencil

### **Format for charts**



Roll No.	Subject	Topic
24	Music	Paste the pictures of Folk instruments of Punjab with names
25	Dance	सत्त्रिया: असम (Classical dance)
26	Dance	भरतनाट्यम: तमिलनाडु (Classical dance)
27	Dance	कथकली: केरल (Classical dance)
28	Dance	कुचिपुडी: आंध्र प्रदेश (Classical dance)
29	Dance	मणिपुरी: मणिपुर (Classical dance)
30	Dance	मोहिनीअट्टम: केरल (Classical dance)
31	Dance	ओडिसी: ओडिशा (Classical dance)
32	Music	Alankar no. 4 & 5
33	Music	Paste the pictures of Punjabi singers with their names
34	Music	Paste the pictures of Hindi play back singers with their names
35	Music	Musical instruments

## **Instructions:-Prepare Chart according to your Roll number**

1. Use a thick full white chart.
2. Use chart vertically.
3. Write headings with pencils.
4. Don't colour the borders.
5. Use thick black marker for written material.
6. Size of the letters should be 3cm.
7. Topics of chart are given according to the Roll numbers.

## **Format for charts**

